




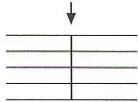




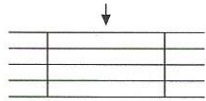





Notation, Notation, Notation

Name _____

Class _____

DIRECTIONS: Match each term on the left with the best example on the right.

- ___ QUARTER NOTE ___ RESTS
- ___ SCALE ___ STEM
- ___ TIE ___ ACCENT
- ___ FLAT ___ STAFF
- ___ BAR LINE ___ TREBLE CLEF
- ___ FERMATA ___ HALF NOTE
- ___ MEASURE ___ SHARP

- A. 
- B. 
- C. 
- D. 
- E. 
- F. 
- G. 
- H. 
- I. 
- J. 
- K. 
- L. 
- M. 
- N. 

DIRECTIONS: Find each term in the grid below. The term may be forward, backward, down, up, or diagonal. Some of the letters will be used more than once. Each term will always be in a straight line. When you find the term, circle the letters.

W	E	R	R	T	E	N	I	L	R	A	B
Q	S	T	E	M	E	C	E	V	E	W	E
S	U	H	A	L	F	N	O	T	E	A	T
C	I	A	R	E	O	Y	E	S	T	C	R
A	U	Q	R	M	N	A	T	G	S	C	E
L	A	C	U	T	T	S	C	O	T	E	B
E	N	O	D	A	E	E	F	N	A	N	L
L	G	G	M	R	R	R	A	L	D	T	E
A	W	R	R	E	W	T	N	T	A	O	C
M	E	A	S	U	R	E	G	O	N	T	L
F	D	G	T	F	F	R	E	C	T	B	E
L	A	R	U	T	A	N	I	C	G	E	F
P	R	A	H	S	P	S	T	A	F	F	L

BONUS QUESTION: The name of this musical symbol  is hidden in the grid. Write your answer here and circle the letters in the grid.
